

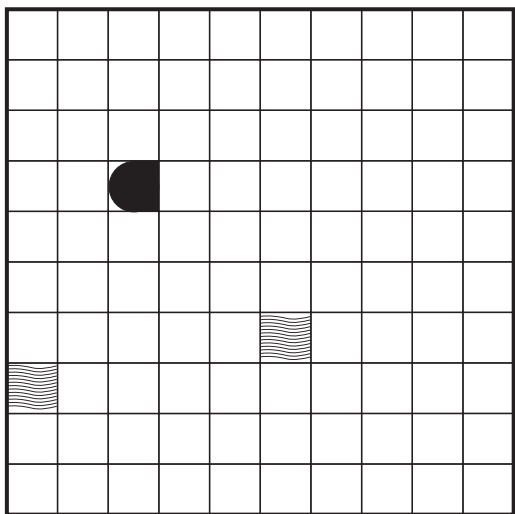


BRODOVLJE



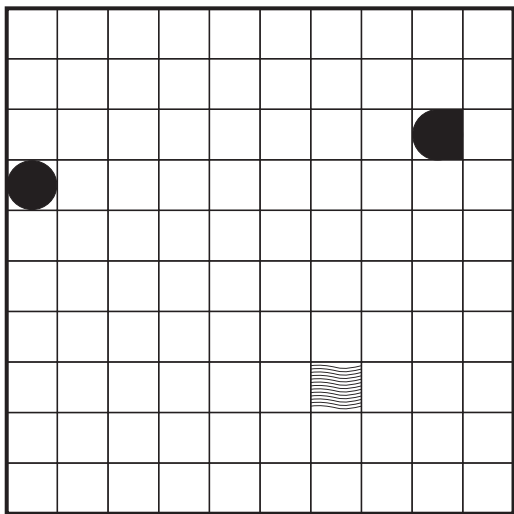
Conceptis

Ispunite svaku od četiri donje mreže danim shemama brodova. Pritom će vam pomoći brojevi uz mrežu koji govore koliko ima popunjenih polja u odgovarajućem retku, odnosno stupcu. Niti jedan brod se ne dodiruje s drugim, čak ni dijagonalno.



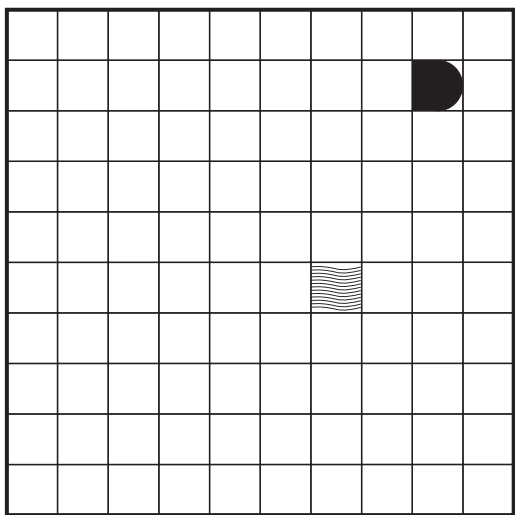
3
0
1
2
0
0
2
5
2
5

1 1 3 1 1 5 1 4 0 3



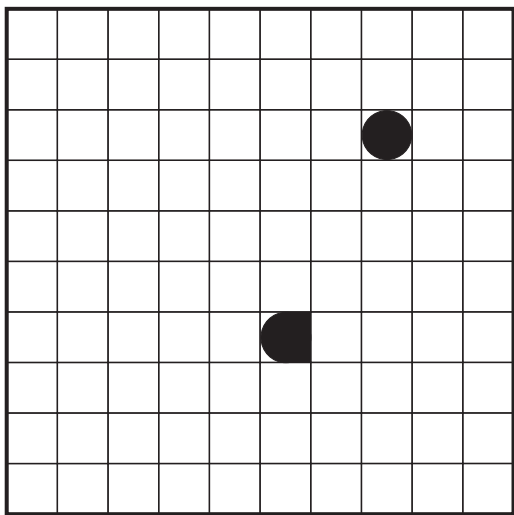
1
5
2
1
4
0
0
4
2
1

1 1 3 2 1 1 4 2 3 2



3
3
3
3
1
1
0
2
1
3

0 4 0 1 4 2 2 3 2 2



4
0
1
1
2
1
2
0
5
4

3 2 1 2 0 3 2 2 0 5

