

**WIZARA YA ELIMU, SAYANSI NA TEKNOLOJIA
DARASA LA IV
SOMO LA SAYANSI NA TEKNOLOJIA-2020**

JINA.....MKONDO.....TAREHE.....

1. Chagua herufi ya jibu sahihi.

- i. Milango ya fahamu ina _____ katika uchunguzi
(a)ubunifu (b)udhaifu (c)tofauti (d) njia
- ii. Nzi hupendelea zaidi sehemu za _____(a)kame (b)chafu (c)safi (d) nzuri
- iii. Ili kuona maji ya kisima yana viini vya maradhi utatumia _____
(a)hadubini (b)darubini (c)kipimajoto (d) kipima mvua
- iv. Wadudu hatari wanaonyonya damu ni chawa, kunguni na _____
(a)kunguni (b)mende (c) jongoo (d) nge
- v. Ipi ni njia ya kujikinga kuumwa na mbu _____
(a)kulala kwenye chandarua (b)kufukia takataka (c)kufukia madimbwi (d) kulala chini

2. Oanisha sehemu A na B ili kuleta maana

SEHEMU A

SEHEMU B

- i. Protini [] (a) karanga, siagi, na korosho
- ii. radi [] (b) husababisha ajali
- iii. Nyaya za umeme [] (c) inaanguza nyumba
- iv. Seli hai nyeupe [] (d) huteketeza sumu na viini vya magonjwa
- v. Vyakula vyenye mafuta [] (e) magonjwa ya kuambukizwa
(f) hujenga na kuimarisha mwili

3. Soma habari hii kasha jibu maswali yafuatayo

Redio ni kifaa kinachotumika kutupasha habari na kutuburudisha.Redio ina sehemu mbalimbali kama vile Antena,spika,batoni za kuongeza na kupunguza sauti,mita bendi na sehemu zinginezo ambazo hazionekani. Kazi ya spika ni kutoa sauti na antenna kazi yake ni kunasa mawimbi ya sauti. Kutokana na maendeleo ya sayansi na teknolojia watu wengi hutumia umeme kuchaji redio badala ya kutumia betri.

Maswali.

- i. _____ ni kifaa kinachotumika kutupasha habari
- ii. Kazi ya spika katika redio ni ipi? _____
- iii. Mawimbi ya sauti hunaswa na _____ katika redio.
- iv. Taja kazi moja ya mitabendi katika redio _____
- v. Nini maana ya mawasiliano _____

4. Tazama picha zifuatazo kisha jibu maswali Kwa ufasaha

Taja matumizi ya alama hizi hapo chini



i. _____



ii. _____

Chunguza wadudu hawa kisha jibu maswali.



A.



B.

- i. Mdudu A hutengeneza kinywaji kinachoitwa _____
- ii. Katika picha B mdudu huyu huyu hueneza ugonjwa unaoitwa _____
- iii. Taja maskani ya mdudu katika picha A _____
- iv. Jina la mdudu kwenye picha B huitwaje? _____
- v. Taja dalili mojawapo unapoumwa na mdudu katika picha B _____

5. Jaza nafasi zilizoachwa wazi

- i. Maji yakiwekwa kwenye friji yataganda na _____
- ii. Virutubisho vinavyofanya mwili kukua ni _____
- iii. Mazingira machafu husababisha mlipuko wa _____
- iv. Sehemu kubwa ya mwili wa binadamu imefunikwa na _____
- v. Radi ni aina ya _____

**WIZARA YA ELIMU, SAYANSI NA TEKNOLOJIA
DARASA LA IV
SOMO LA URAI NA MAADILI-2020**

JINA.....MKONDO.....TAREHE.....

SECONDARY FORM 1- 4

1. Chagua jibu sahihi katika swali la i-v

- i. Wimbo wa taifa unaweza kuimbwa katika matukio yote yafuatayo Isipokua _____
(A) katika vituo vya kupigia kura
(B) kabla ya raisi kuhutubia taifa (C) Rais au makamu wake anapotembelea sehemu
(D) mkuu wan chi nyingine anapotembelea nchi yetu
- ii. Tanganyika ilikuwa jamuhuri tarehe _____
(A) 26- 4 - 1961 (B) 26-4-1964 (C) 9-12-1962 (D) 26-10-1961
- iii. Mojawapo ya alama ya taifa inayopatikana katika noti za Tanzania ni _____
(A) picha ya nyati (B) rais wa kwanza wa Tanzania (C) nembo ya taifa (D) mlima Kilimanjaro
- iv. Bendera ya rais hupepea sehemu zifuatazo zote isipokuwa _____ (A) ikulu
(B) Kwenye gari lake (C) bungeni (D) ofisini mwake
- v. Ipi kati ya zifuatazo ni alama ya taifa la tanzania _____
(A) ikulu (B) Jengo la bunge (C) wimbo wa taifa (D) makumbusho

2. Oanisha sehemu A na B ili kuleta maana

SEHEMU A**SEHEMU B**

- i. Muungano [] (a) Matatizo yanayohitaji kutatuliwa
- ii. Jamhuri [] (b) 1962
- iii. Lugha [] (c) 1964
- iv. Malimu wa nidhamu [] (d) Mawasiliano
- v. Changamoto [] (e) Kuangalia mienendo ya wanafunzi

TUNAUZA MITIHANI

SHULE ZA MSINGI
ENGLISH MEDIUM

3. Soma habari hii kasha jibu maswal iyafuatayo Kwa umakini

Uzalendo ni kitendo cha mtu kuipenda nchi au jamii yake inayomzunguka. Na mtu anayeipenda nchi yake huitwa mzalendo. Mfano wa wazalendo katika nchi yetu ya Tanzania ni Mwl J.K. Nyerere, Sheikh Abeid Amani Karume na wengineo.

Pia shuleni tunafundishwa kuwa watiifu na kuenendena vizuri pamoja na kuwasaidia wazazi, walimu, wadogo pamoja na wakubwa katika shughuli mbalimbali. Uzalendo huleta maendeleo na kupelekea huduma muhimu kuimarika mfano hospitali, shule, barabara, maji na huduma nyinginezo.

Maswali

Taja huduma tatu za jamii

i. _____

ii. _____

iii. _____

iv. _____ ni mtu anayeipenda nchi yake

v. Taja mfano mmojawapo wa mzalendo kutoka kwenye habari hii _____

vi. Sheikh Abeid Amani Karume alikuwa Rais wa nchi gani? _____

4. Soma na tazama picha hii kisha jibu maswali yafuatayo



i. Watu hawa wanfanya nini? _____

ii. Ni tunu gani ya taifa inaonekana hapo juu? _____

iii. Tunu hii ya taifa hupandishwa juu ya mlingoti saa ngapi? _____

iv. Ni muda gani tunu hii hushushwa _____

v. Tunu hii inaashiria kuwa nchi ya Tanzania sasa ni _____

5. Jaza nafasi zilizo achwa wazi

i. Taja alama mbili za taifa letu _____ na _____

ii. Nini maana ya uwajibikaji? _____

iii. Rangi ya kijana katika bendera ya taifa huwakilisha nini? _____

iv. _____ ni Waziri mkuu kwa sasa nchini Tanzania

WIZARA YA ELIMU, SAYANSI NA TEKNOLOJIA
DARASA LA IV
SOMO LA MAARIFA YA JAMII-2020

JINA.....MKONDO.....TAREHE.....

1. Chagua jibu sahihi katika swali la i-v

- i. Zifuatazo ni maliasili za nchi yetu isipokuwa _____
A. Darasa B. misitu C. maziwa D. bahari
- ii. Zamani mgawanyo wa kazi ulikuwa umegawanyika katika _____
A. Jinsia na umri B. maisha ya familia C. watoto na wazee D. jinsia rangi na ujuzi
- iii. Mh Alli Hassani Mwinayi alikuwa rais wa _____ nchini Tanzania
A. 4 B. 6 C. 2 D. 1

- iv. Chanzo cha mawasiliano wanachopata watu wengi ni _____
 A. Intaneti B. redio C. runinga D. magazeti
- v. Kati ya haya yafuatayo sio matukio ya familia _____
 A. Kuzaliwa B. kuolewa C. kifo D. siku ya uhuru

2. SEHEMU AOANISHA MANENO KATIKA KIFUNGU A NA YALE YA KIFUNGU B:

	FUNGU A	JIBU	FUNGU B
i.	Mke na mme	A.	Hapa kazi tu
ii.	Kaulimbiu ya TAifa	B.	Kivutio cha watalii
iii.	Adam Sapi Mkwawa	C.	Rais
iv.	Bendera	D.	Utajiri wa wanyama pori
v.	Morani	E.	Jeshi la jadi
vi.	Mkuu wa nchi	F.	Spika wa kwanza wa bunge
vii.	Mlima Kilimanjaro	G.	Umoja na ushirikiano
		H.	Nchi huru

NUKUU ZA SOMO/NOTES
 SHULE ZA MSINGI
 ENGLISH MEDIUM
 SECONDARY FORM 1- 6

KWA MAWASILIANO
 0766277909

0676277906

3. Tazama picha hii na kisha ujibu maswali yafuatayo.



- i. Kiongozi hapo juu alikuwa wa kabila la _____ nchini Tanzania

- ii. Alipigana na wajerumani kuanzia mwaka _____ hadi _____
- iii. Kwanini kiongozi huyu alijiua mwenyewe? _____
- iv. Taja jina la kiongozi huyu _____
- v. Fuvu la kichwa la kiongozi huyu lilirejeshwa nchini kutoka Ujerumani mwaka gani? _____

4. Jaza nafasi zilizoachwa wazi

- i. _____ ni mfumo wa jamii ambao njia kuu za uchumi zilimilikiwa na watu wote
- ii. Kabila la maasai ni maarufu kwa shughuli ya _____
- iii. Katika enzi za ujima watu walifanya kazi kwa _____
- iv. Miaka 100 hufanya _____ Kimoja
- v. Taja njia ya usafiri ya haraka nchini Tanzania _____
- vi. Nini maana ya uoto wa asili? _____
- vii. Andika kirefu cha neno hili C.C.M _____

MSUYA STATIONERY
TUNAPATIKANA TARIME MIINI
TUNAUZA MITIHANI
SHULE ZA MSINGI
ENGLISH MEDIUM
SECONDARY FORM 1- 4

NUKUU ZA SOMO/NOTES
SHULE ZA MSINGI
ENGLISH MEDIUM
SECONDARY FORM 1- 6

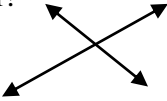
KWA MAWASILIANO
0766277909
0676277906




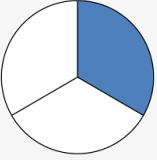
msuyastationary@gmail.com

**WIZARA YA ELIMU, SAYANSI NA TEKNOLOJIA
DARASA LA IV
SOMO LA HISABATI-2020**

JINA.....MKONDO.....TAREHE.....

















































































































JIBU MASWALI YOTE

Na	SWALI	KAZI	JIBU
1 i.	$7770 + 880 =$		
ii.	$3334 - 900 =$		
iii.	$750 \div 15 =$		
iv	$890 \times 32 =$		
v	$54 + 1 =$ Andika jibu kwa kirumi		
2.i.	Andika tofauti ya 4000 na 30		
ii.	Andika namba hizi kwa maneno 888		
iii	996		
iv	$\frac{4}{9} + \frac{3}{9} =$		
v	$\frac{10}{11} - \frac{7}{11} =$		
3.i.	Kuna mistari minyoofu mingapi katika umbo hili? 		
ii.	$30sm + 45sm =$		
iii.	Tafuta zao la 580 na 20		

iv.	<p>Tafuta mzingo wa umbo lifuatalo</p>  <p>Sm 20</p> <p>sm 35</p>		
v.	<p>Tafuta eneo la mraba</p>  <p>sm 5</p>		
4.i.	<p>Badili kilogramu 4 kuwa gramu</p>		
ii.	 <p>Mchoro huu unaonesha saa ngapi?</p>		
iii	<p>Pipa la maji lilikuwa na lita 240 za maji. Je lilikuwa na milimita ngapi za maji?</p>		
iv.	<p>Kemi alinunua mayai 7 @ s. 100, ndizi 5 @ sh 20 na machungwa 6 @ 30. Je alitumia shilingi ngapi</p>		
v.	 <p>Taja sehemu iliyotiwa kivuli hapo juu</p>	<p>0766277909</p> <p>0676277906</p> <p>msuyastationary@gmail.com</p>	

5.Soma chati hapo chini kisha jibu mswali

Idadi ya wanafunzi katika shule ya msingi Kambarage

drs1	drs2	drs3	drs4	drs5	drs6	drs7
						
						
						
						
						
						
						
						
						
						
						
						
						
						
						
						



Alama hii huwakilisha wanafunzi 10.

i.Ni wanafunzi wangapi wanasoma darasa la nne?

ii.Kuna jumla ya wanafunzi wangapi darasa la tano na sita?

iii. Ni wanafunzi wangapi wako darasa la tatu?

iv.Ni darasa gani lina wanafunzi wengi?

v. Darasa gani lina wanafunzi wachache?

MSUYA STATIONERY
TUNAPATIKANA TARIME MJINI

WIZARA YA ELIMU, SAYANSI NA TEKNOLOJIA
DARASA LA IV
SOMO LA KISWAHILI-2020

JINA.....MKONDO.....TAREHE.....

Jibu maswali yote

IMLA

1. Sikiliza na andika sentensi kwa usahihi.

- i. _____
ii. _____
iii. _____
iv. _____
v. _____

MATUMIZI YA LUGHA

2. Chagua jibu lililo sahihi ili kukamilisha sentensi zifuatazo kwa kuandika herufi kwenye kisanduku.

- i. Baba na Mama _____ kumwona dada jana []
A. Walienda B. Wameenda C. Wangeenda D. Wataenda
- ii. Jua huchomoza upande wa _____ []
A. Mashariki B. Magharibi C. Kusini D. Kaskazini
- iii. Mwanamvua aliandaa tafrija _____ vizuri. []
A. Yomo B. Ya yeye C. Chake D. Yake
- iv. Fundi _____ hushona suruali na magauni []
A. Mwashii B. Cherehani C. Viatu D. Seremala
- v. Wageni wanaotembelea eneo kwa ajili ya kujua tukio Fulani huitwa _____ []
A. Watalii B. Wapelelezi C. Watafiti D. Wawindaji

METHALI, NAHAU NA VITENDAWILI.

3. Jaza nafasi zilizo achwa wazi

Methali

i. Asiyesikia la mkuu huvunjika guu maana yake ni _____

Toa maana ya nahau hizi

ii. Ana mkono mrefu _____

iii. Kuaga dunia _____

Vitendawili

iv. Pana ng'ombe miongoni mwa kundi la ndama _____

v. Mimi nakungojea wewe wanitumbulia macho tu _____

UTUNGAJI

4. UTUNGAJI: Zipange sentensi zifuatazo katika mtiririko mzuri wa mawazo kwa kuzipa herufi A, B, C, D, na E

i. Skauti walipewa nyeti _____

ii. Miongoni mwa klabu hizo ni skauti _____

iii. Skauti walifurahi kwa kupanda mlima _____

iv. Skauti walipanda baada ya kulipa ada _____

v. Shule ya msingi Rumanyika ina klabu mbali mbali _____

UFAHAMU

5. Soma habari hii kisha jibu maswali yafuatayo

Safari za baharini hufanywa na watu mbali mbali. Baadhi ya watu hao ni wavuvi. Wavuvi husafiri baharini kila siku. Hapa mtaani kwetu Sudi hufanya safari hizo kila asubuhi. Jioni anaporudi huja na samaki wengi sana. Majirani hununua samaki kwake kwani bei yake ni nzuri. Pia Sudi huuza hata kwa mkopo. Kwa hiyo watu wanampenda kwa yote hayo.

Siku moja Sudi aliondoka kwenda katika safari zake za uvuvi. Watu walikaa wakimsubiri arudi na samaki. Akina mama walisuburi mpaka jioni ili wapate kitoweo. Siku hiyo, bila kutarajia Sudi hakuonekana mpaka usiku.

Maswali:

- i. Sudi anafanya kazi gani _____
- ii. Kwa nini Sudi alipendwa pale mtaani? _____
- iii. Kazi ya mvuvi ni _____
- iv. Taja aina mbili za samaki unaowafahamu _____ na _____
- v. Sudi huuza samaki hata kwa kopo _____

TUNAPATIKANA TARIME MJINI

TUNAUZA MITIHANI

*SHULE ZA MSINGI
ENGLISH MEDIUM
SECONDARY FORM 1- 4*

MINISTRY OF EDUCATION, SCIENCE AND TECHNOLOGY

STANDARD FOUR EXAMS

SUBJECT: ENGLISH

Answer all questions

DICTATION.

1. Listen carefully to the sentence read in (i)-(v) and then write them in the blanks provided.

- i. _____
- ii. _____
- iii. _____
- iv. _____
- v. _____

VOCABULARY

2. Match the words in column A with their correct meaning in column B

COLUMN A

- i. Baker _____
- ii. Replying _____
- iii. Veal _____
- iv. Shepherdess _____
- v. Restaurant _____

COLUMN B

- A. Working place for a waiter
- B. A female sheep
- C. Term given to the meat of a calf
- D. A very old sheep
- E. A person who makes and sells bread
- F. An act of saying or writing an answer to somebody
- G. A female who rears sheep
- H. A place where money is made

GRAMMAR

3. Fill the blanks with the most correct word.

- i. Byarugaba always goes to the market _____ bus.
- ii. Our teacher told us to sit _____ the bench.
- iii. The bicycle belongs to him. It is _____
- iv. How _____ money is a bottle of soda?
- v. Kyoma is taller _____ his sister.

COMPOSITION

4. Fill in the gaps correctly with the words from the box.

Neighbour, photos, doctors, stop, help, firefighters, huge, tall.

This morning, there was a (i) _____ fire in our neighborhood. We called the (ii) _____ immediately. Before they came, a police officer on patrol organized the residents to (iii) _____ put the fire out. Our (iv) _____ Who is a journalist, started taking the notes of the incident. Although I am a photographer, I was too scared to take any (v) _____

COMPREHENSION

5. Read the passage and then answer the questions correctly on it

Thomas was always lazy, ever since he was in class three. He could come to school late and give very many excuses and sometimes he even lied to his teacher.

He didn't know how to use a watch or wall clock. He depended on his big cock to crow. One day he went to school late because the cock crowed very early in the morning and he went back to sleep. When Thomas got into the class, his classmates laughed at him.

His class mate taught him how to use a watch and he became a good boy.

Questions

- i. The passage is about _____
- ii. Thomas didn't know how to use _____ or _____
- iii. When Thomas got into the class his classmates _____
- iv. Why did Thomas go to school late one day? Because _____
- v. Who taught Thomas how to use a watch? _____

KWA MAWASILIANO

0766277909

0676277906

msuyastationary@gmail.com